

Name: _____

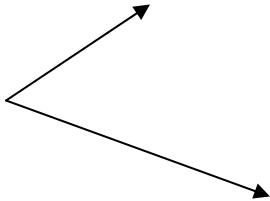
Class: _____

Angle Practice

Angle Practice

Directions: Measure each angle using a protractor. Record the angle measure and classify the angle as either acute, obtuse, right, or straight.

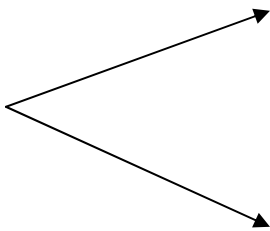
1.



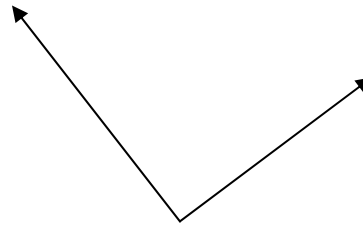
2.




3.



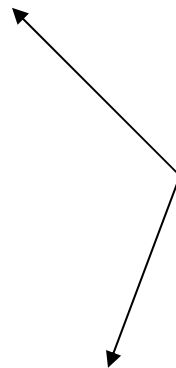
4.



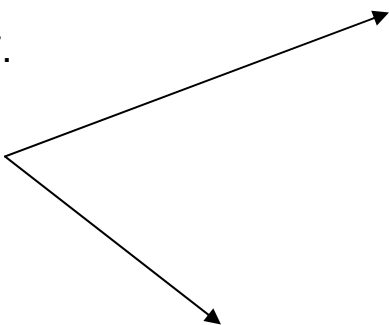
5.



6.



7.



8.

