

Name: _____

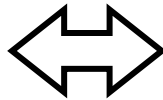
Math Practice: Page 30

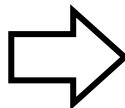
Class: _____

Date: _____

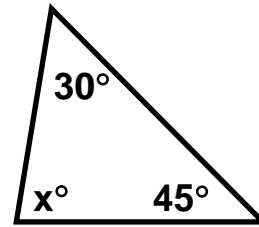
1) Name each of the following polygons.



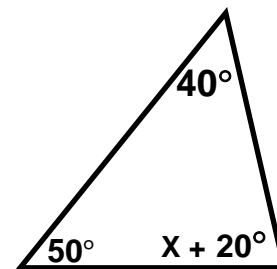




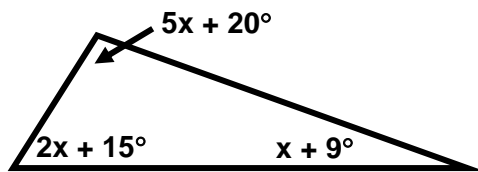
2) Find the measure of the missing angle.



3) Find the measure of the missing angle.

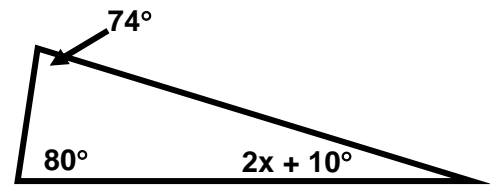


3) Find the measure of all angles below.



Hint: Solve for x and then substitute to find the missing angle measurements.

4) Find the measurement of the missing angle below.



Show all work.