

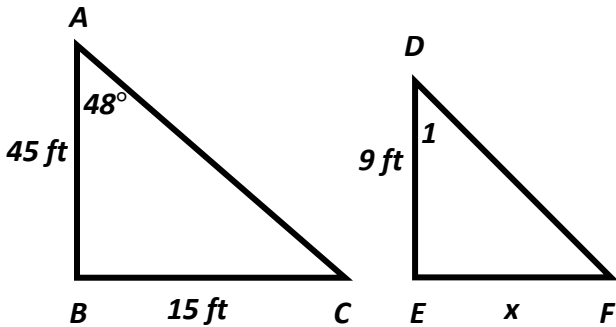
Name: _____

Math Practice: Page 32

Class: _____

Date: _____

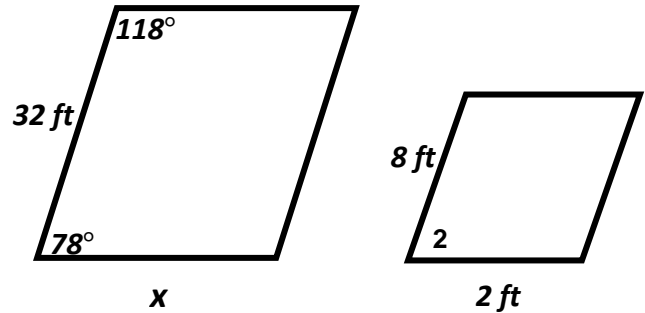
1) The triangles below are similar.



Find the measure of $\angle 1$. _____

Find x. _____

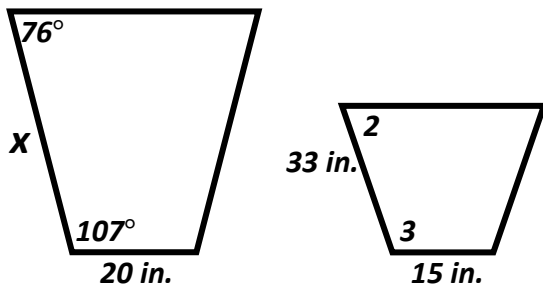
2) The triangles below are similar.



Find the measure of $\angle 2$. _____

Find x. _____

3) The figures below are similar.




Find the measure of

$\angle 2 =$ _____ $\angle 3 =$ _____

Find the measure of x. _____

4) The Big Macs below are similar.



Find the measure of x. _____

T or F: It has been found that eating one Big Mac a day will keep the doctor away.