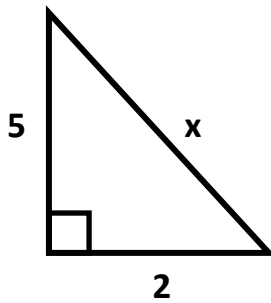
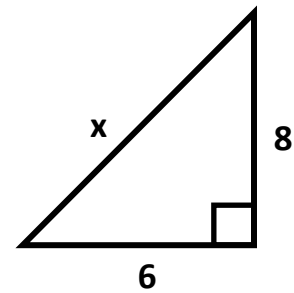


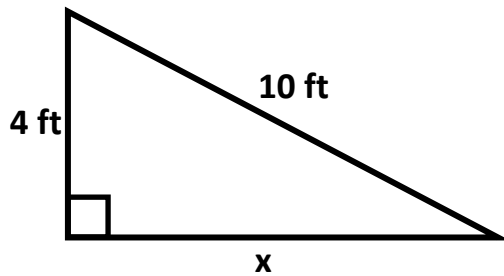
1) What is the length of side x in the triangle below?

Please circle the correct answer.

- A 7 B 29 C $\sqrt{29}$ D $\sqrt{7}$**

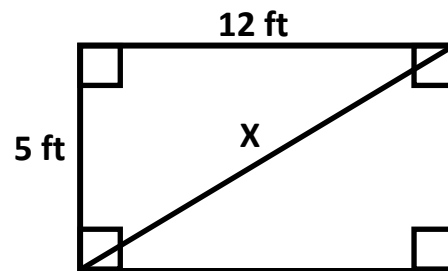
2) What is the length of side x in the triangle below?

Please show all of your work.

3) What is the length of side x in the figure below?

Please round your answer to the nearest tenth of a foot.

Show all work.

4) What is the length of side x in the figure below.

5) Tell whether the following lengths represent a right triangle.

A. 3, 4, 5

6) Tell whether the following lengths represent a right triangle.

B. 10, 18, 26